

Name: _____

Date: _____

Pizza Fractions

Look at the pictures and write the proper fraction.

one whole

one half

one sixth

one ninth










one fifth

one fourth

one third

one seventh

one eighth

 <input type="text"/>	 <input type="text"/>	 <input type="text"/>
 <input type="text"/>	 <input type="text"/>	 <input type="text"/>
 <input type="text"/>	 <input type="text"/>	 <input type="text"/>

Name: Answer key

Date: _____

Pizza Fractions

Look at the pictures and write the proper fraction.

one whole

one half

one sixth

one ninth

one fifth

one fourth


one third

one seventh

one eighth



one whole




one fourth




one seventh



one sixth



one half



one eighth



one fifth



one ninth



one third