













# MONEY MATH

Look at the shopping items below then calculate the total of each shopping basket.

<b>banana 50c</b> 	<b>sausage 75c</b> 	<b>juice = \$1.65</b> 
<b>cupcake = \$1.50</b> 	<b>pineapple = \$3</b> 	<b>cheese = \$ 1.20</b> 
<b>bread = \$2.75</b> 	<b>ice-cream = \$4.20</b> 	<b>milk = \$2.10</b> 
<b>watermelon = \$4</b> 	<b>candies = 50c</b> 	<b>apple = 75c</b> 

## Shopping Baskets

Shopping basket	Total	Shopping basket	Total
1 cupcake 3 bananas 2 apples		1 ice-cream 2 cheese 6 candies	
2 bread 2 milk 2 sausages		3 cheese 1 milk 2 pineapples	
12 candies 1 watermelon 1 juice		6 apples 1 juice 8 bananas	