

Name: \_\_\_\_\_




























Date: \_\_\_\_\_



# VALENTINE'S DAY CARD EXCHANGE



The pictograph below shows how many cards each child sent. Use the pictograph to answer the questions.

|           |                                                                                                                                                                                                                                                                                                                                                                                                                                |
|-----------|--------------------------------------------------------------------------------------------------------------------------------------------------------------------------------------------------------------------------------------------------------------------------------------------------------------------------------------------------------------------------------------------------------------------------------|
| Aaron     |                                                                                                                                                                            |
| Adeline   |      |
| Adora     |                                                                                         |
| Alexander |                                                                                                                                                                                                                                                              |
| Alfredo   |      |
| Anna      |                                                                                                                                                                         |
| Avery     |                                                                                 |
| Bailey    |                                                                                                                                                                                                                                                                                                                                             |

key:  equals 2 people

- How many cards did Anna send? \_\_\_\_\_
- How many cards did Alfredo send? \_\_\_\_\_
- How many more cards did Avery send than Alexander? \_\_\_\_\_
- How many cards did Aaron send? \_\_\_\_\_
- Name two people who sent the same number of cards. \_\_\_\_\_
- How many more cards did Alfredo send than Bailey? \_\_\_\_\_
- How many cards did Adora send? \_\_\_\_\_