




# LUCKY PUZZLES



**Instructions:** Determine what each of the St Patrick images represent in the following maths problems:

$$\text{Sunglasses} + \text{Sunglasses} + \text{Sunglasses} = 27$$

$$\text{Rainbow} + \text{Rainbow} - \text{Sunglasses} = 5$$

$$\text{Pot of Gold} - \text{Rainbow} + \text{Sunglasses} = 18$$

$$\text{Pot of Gold} + \text{Pot of Gold} + \text{Pot of Gold} = \square$$

$$\text{Sunglasses} + \text{Pot of Gold} + \text{Sunglasses} + \text{Rainbow} = \square$$