

Name: _____

DECIMALS AND FRACTIONS


Focus: Writing Fractions as Decimals Using Visual Models


Write the decimal that is shaded.





















Name: _____

DECIMALS AND FRACTIONS

Focus: Writing Fractions as
Decimals with Visual Models

Write the decimal that is shaded.

